




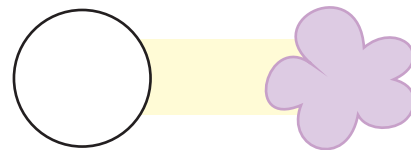
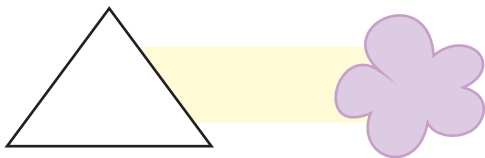
Data Handling



0119CH09



Count the shapes in the above picture.



Name the shapes that occurs the most

that occurs the least

Teachers Note

Refer to page no. 145 to develop understanding of data handling.



These children are friends.

Count the number of letters in each name-word.

Names	Number of letters
S A L M A	<input type="text"/>
J O S E P H	<input type="text"/>
A R U N	<input type="text"/>
C H I N T U	<input type="text"/>
G E E T A	<input type="text"/>
A S H A	<input type="text"/>
S U B B U	<input type="text"/>
A H M A D	<input type="text"/>
R A V I	<input type="text"/>

How many names have four letters

How many names have five letters

How many names have six letters

How many times **S** comes in all the names taken together

How many times **A** comes in all the names taken together